

B.B.M.B D.A.U. PUBLIC SCHOOL NANGAL

Worksheet No - 6

Subject - Maths

Class - II

Topic - Brain teasers

Name -

Roll No -

Section -

Date - 3.10.18

Q1 Solve

a) $90 - \square = 80$

b) $\square - 7 = 3$

Q2 Put the right sign [$>$, $<$ or $=$]

a) $60 + 9 \square 79$

b) $100 - 1 \square 99$

Q3 Put \square or \square

a) $450 = 400 + 5 + 0 \square$

b) $100 - 7 = 93 \square$

Q4 complete the series

\square \square \square \square \square

Q5 Fill in the box

a) There are paise in 1 rupee.

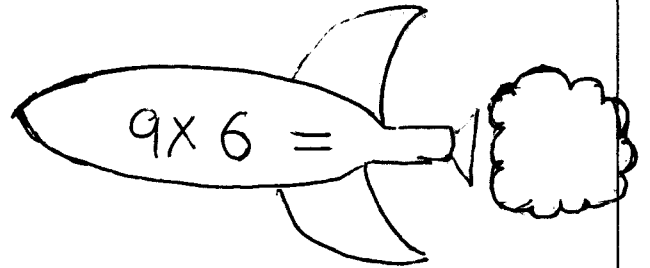
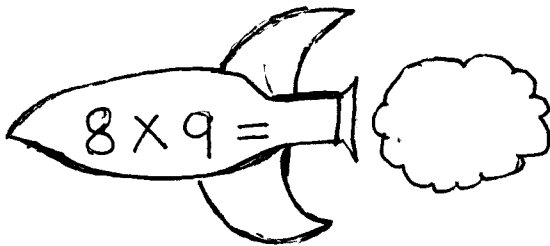
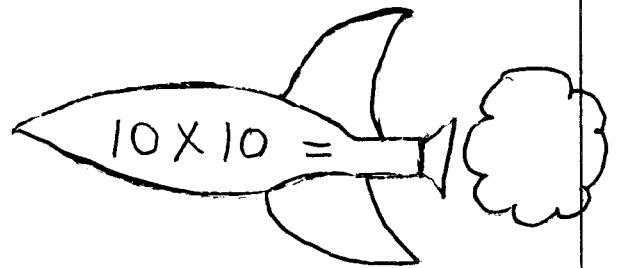
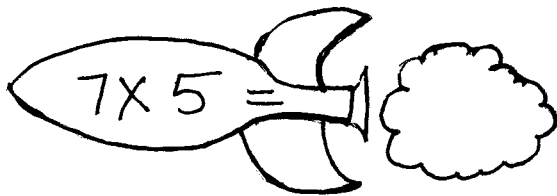
b) 50 paise coins makes 1 rupee.

Q6 Tick (✓) the questions which make ₹100

a) ₹ 70 + ₹ 50 =

b) ₹ 20 + ₹ 80 =

Q7 Write the answers in the rocket smoke:-



Q8 Fill in the blanks

a) 80 + = 12 + 80

b) 41 + 29 = 29 +